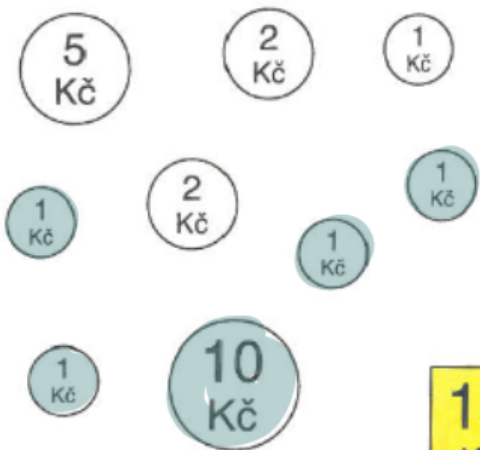
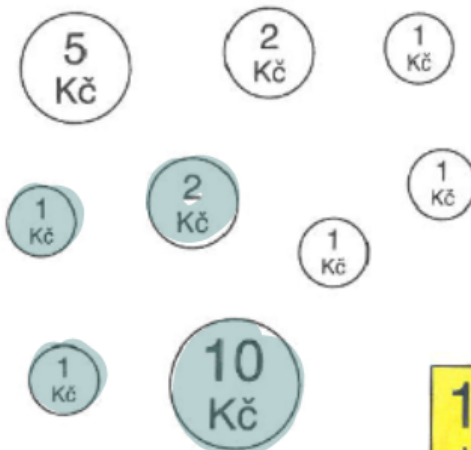


3. Kterými mincemi můžeš zaplatit?



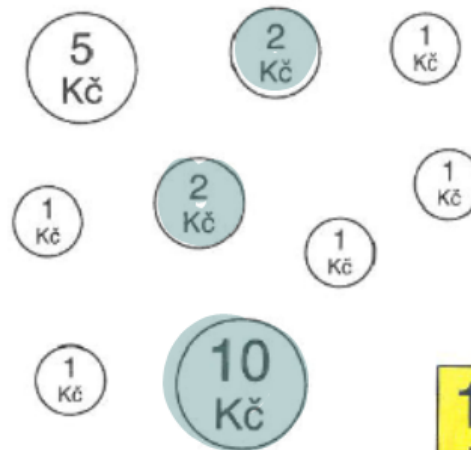
14
Kč

3. Kterými mincemi můžeš zaplatit?



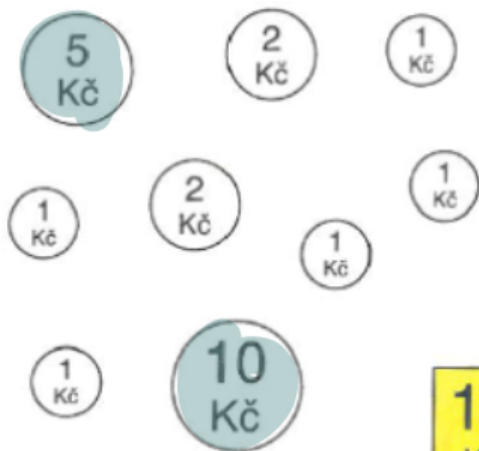
14
Kč

3. Kterými mincemi můžeš zaplatit?



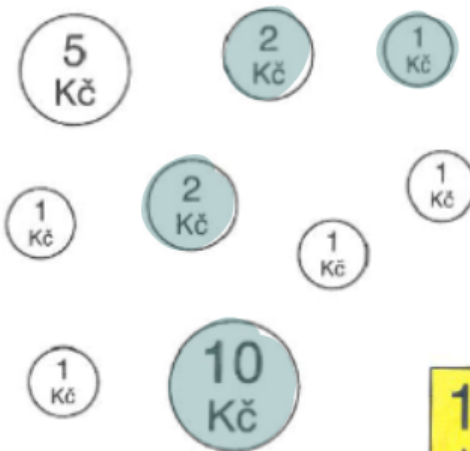
14
Kč

3. Kterými mincemi můžeš zaplatit?



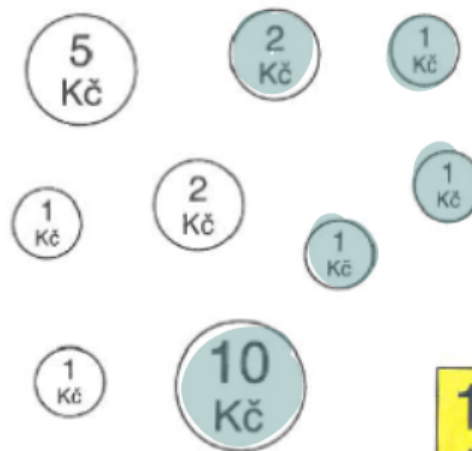
15
Kč

3. Kterými mincemi můžeš zaplatit?



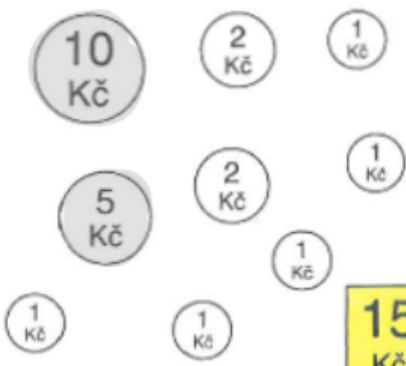
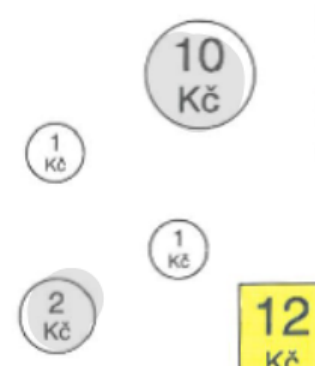
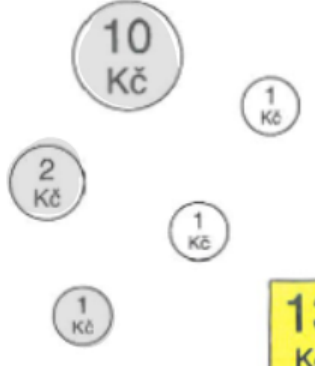
15
Kč

3. Kterými mincemi můžeš zaplatit?






15
Kč

5. Kterými mincemi zaplatíš?

 <p>15 Kč</p>	 <p>12 Kč</p>	 <p>13 Kč</p>
---	--	---

6. Mokřinka byl třikrát na nákupu pentliček. Pokaždé platil 15 dukátů. Kterými mincemi mohl zaplatit?

15	
15	
15	

7.

10-9=

8-6=

9-6=

10-6=

6-1=

9-2=

1+5=

4+3=

6+2=

5+4=

7+3=

10+1=

15=10+ .

12=10+ .

14=10+ .

11=10+ .

13=10+ .

10=10+ .

10=14- .

10=13- .

10=15- .

10=12- .

10=11- .